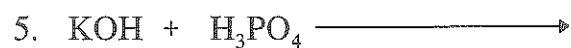
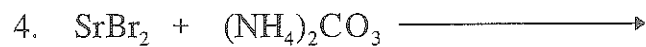


Name _____


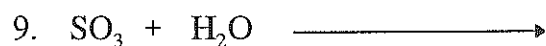
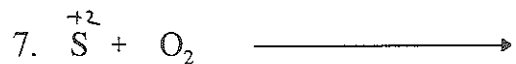

Period _____

Write and Balance the following double replacements, combinations and decomposition reactions.

Double Replacements:



Combination Reactions:



Decomposition Reactions:

